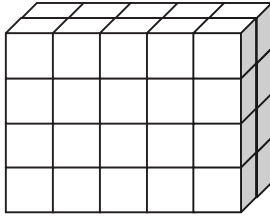


Name \_\_\_\_\_

Date \_\_\_\_\_

1. Each rectangular prism is built from centimeter cubes. State the dimensions, and find the volume.

a.



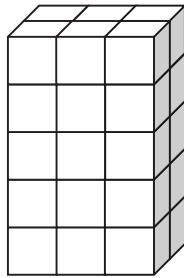
Length: \_\_\_\_\_ cm

Width: \_\_\_\_\_ cm

Height: \_\_\_\_\_ cm

Volume: \_\_\_\_\_  $\text{cm}^3$ 

b.



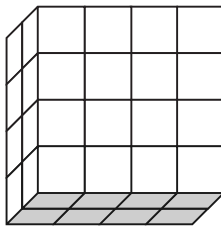
Length: \_\_\_\_\_ cm

Width: \_\_\_\_\_ cm

Height: \_\_\_\_\_ cm

Volume: \_\_\_\_\_  $\text{cm}^3$ 

c.



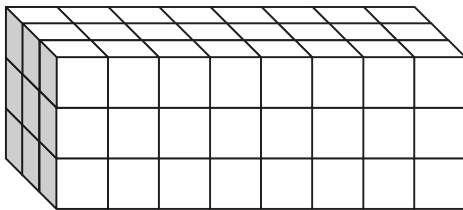
Length: \_\_\_\_\_ cm

Width: \_\_\_\_\_ cm

Height: \_\_\_\_\_ cm

Volume: \_\_\_\_\_  $\text{cm}^3$ 

d.



Length: \_\_\_\_\_ cm

Width: \_\_\_\_\_ cm

Height: \_\_\_\_\_ cm

Volume: \_\_\_\_\_  $\text{cm}^3$ 

2. Write a multiplication sentence that you could use to calculate the volume for each rectangular prism in Problem 1. Include the units in your sentences.

a. \_\_\_\_\_

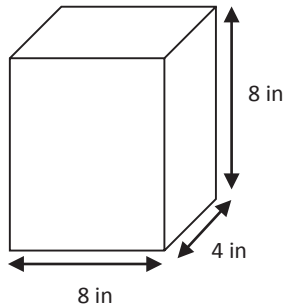
b. \_\_\_\_\_

c. \_\_\_\_\_

d. \_\_\_\_\_

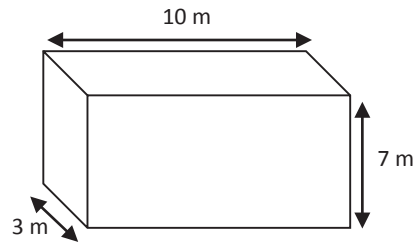
3. Calculate the volume of each rectangular prism. Include the units in your number sentences.

a.



Volume: \_\_\_\_\_

b.



Volume: \_\_\_\_\_

4. Mrs. Johnson is constructing a box in the shape of a rectangular prism to store clothes for the summer. It has a length of 28 inches, a width of 24 inches, and a height of 30 inches. What is the volume of the box?

5. Calculate the volume of each rectangular prism using the information that is provided.

a. Face area: 56 square meters

Height: 4 meters

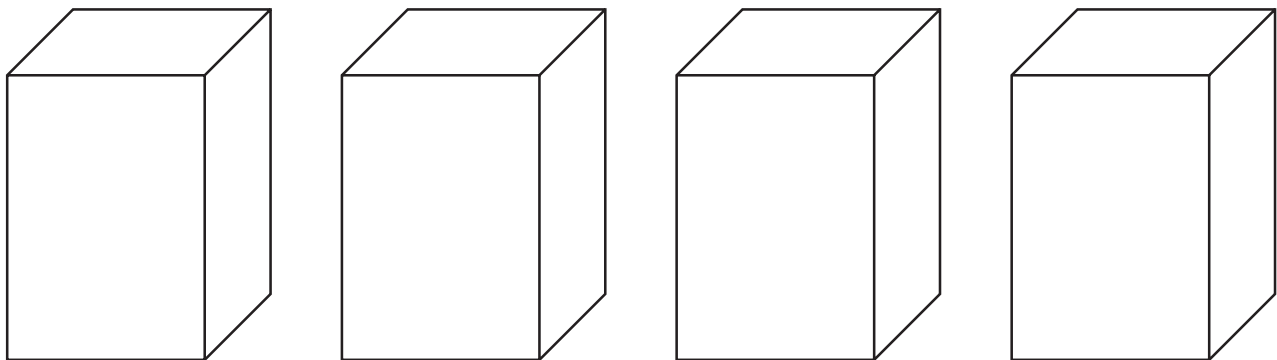
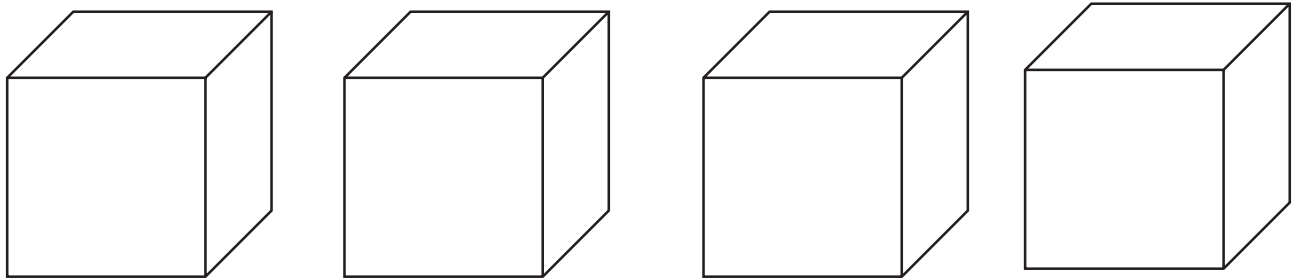
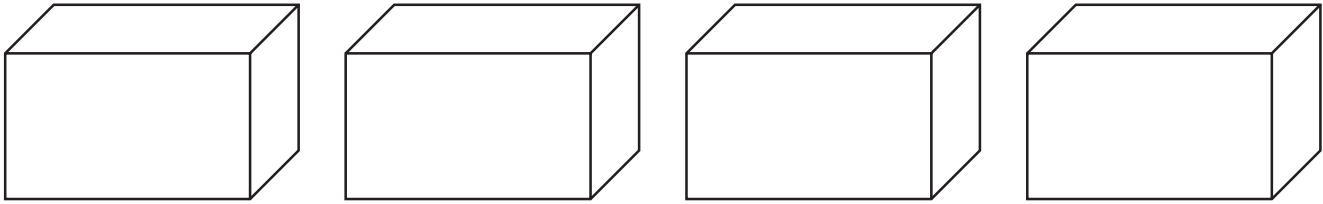
b. Face area: 169 square inches

Height: 14 inches

Name \_\_\_\_\_

Date \_\_\_\_\_

Use these rectangular prisms to record the layers that you count.



---

rectangular prism recording sheet (from Lesson 3)